

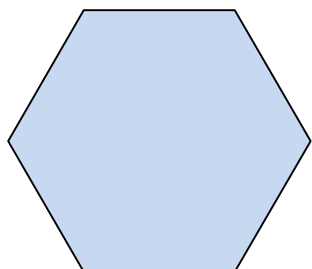
Lekcja 8

Temat: Figury geometryczne – ćwiczenia.

Zadanie 1

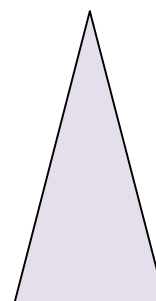
Zmierz wymiary boków. Oblicz obwód każdej z narysowanych figur:

a)



$$Ob = \underline{\quad} + \underline{\quad} + \underline{\quad} + \underline{\quad} + \underline{\quad} + \underline{\quad} =$$

b)



$$Ob = \underline{\quad} + \underline{\quad} + \underline{\quad} =$$

c)




$$Ob = \underline{\quad} + \underline{\quad} + \underline{\quad} + \underline{\quad} =$$

d)




$$Ob = \underline{\quad} + \underline{\quad} + \underline{\quad} + \underline{\quad} =$$

e)



$$Ob = \underline{\quad} + \underline{\quad} + \underline{\quad} + \underline{\quad} =$$

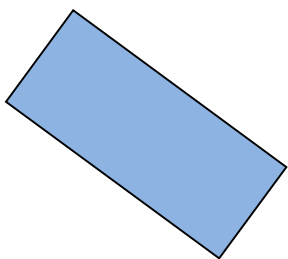
f)



$$Ob = \underline{\quad} + \underline{\quad} + \underline{\quad} =$$

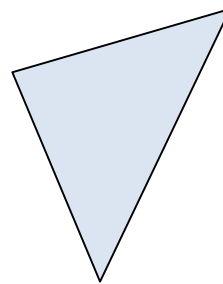


g)




$Ob = \underline{\quad} + \underline{\quad} + \underline{\quad} + \underline{\quad} =$

h)



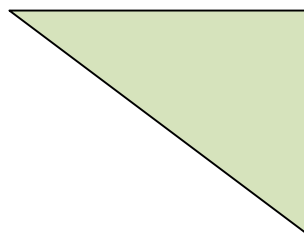
$Ob = \underline{\quad} + \underline{\quad} + \underline{\quad} =$

i)



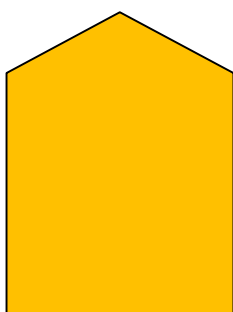
$Ob = \underline{\quad} + \underline{\quad} + \underline{\quad} =$

j)



$Ob = \underline{\quad} + \underline{\quad} + \underline{\quad} =$

k)



$Ob = \underline{\quad} + \underline{\quad} + \underline{\quad} + \underline{\quad} + \underline{\quad} =$

l)



$Ob = \underline{\quad} + \underline{\quad} + \underline{\quad} + \underline{\quad} + \underline{\quad} +$

$+ \underline{\quad} + \underline{\quad} + \underline{\quad} + \underline{\quad} +$

$+ \underline{\quad} + \underline{\quad} + \underline{\quad} =$

